

# Fruit Fractions

## ANSWER KEY

Name \_\_\_\_\_


Date \_\_\_\_\_

1. This is one whole banana. What would the fraction be if you cut it in **2** equal pieces and ate:



1 piece? 1/2

2. This is one whole apple. What would the fraction be if you cut it in **6** equal pieces and ate:



1 piece? 1/6



2 pieces? 2/6  
or 1/3



5 pieces? 5/6

3. This is one whole kiwi. What would the fraction be if you cut it in **5** equal pieces and ate:



1 piece? 1/5




3 pieces? 3/5




4 pieces? 4/5

4. This is one whole orange. What would the fraction be if you cut it in **8** equal pieces and ate:




1 piece? 1/8



4 pieces? 4/8

or 1/2



7 pieces? 7/8

5. Here are 7 cherries. What would the fraction be if you ate:



1 cherry? 1/7



3 cherries? 3/7



5 cherries? 5/7

6. Here are 12 grapes. What would the fraction be if you ate:



1 grape? 1/12



3 grapes? 3/12

or 1/4



6 grapes? 6/12

or 1/2