

Fruit Fractions

Name _____

Date _____

1. This is one whole banana. What would the fraction be if you cut it in **2** equal pieces and ate:



1 piece? _____

2. This is one whole apple. What would the fraction be if you cut it in **6** equal pieces and ate:



1 piece? _____




2 pieces? _____
or _____



5 pieces? _____

3. This is one whole kiwi. What would the fraction be if you cut it in **5** equal pieces and ate:



1 piece? _____




3 pieces? _____




4 pieces? _____

4. This is one whole orange. What would the fraction be if you cut it in **8** equal pieces and ate:




1 piece? _____



4 pieces? _____

or _____



7 pieces? _____

5. Here are 7 cherries. What would the fraction be if you ate:



1 cherry? _____



3 cherries? _____



5 cherries? _____

6. Here are 12 grapes. What would the fraction be if you ate:



1 grape? _____



3 grapes? _____

or _____



6 grapes? _____

or _____